



AGRUPAMENTO DE ESCOLAS DA QUINTA DO CONDE
Escola Básica Integrada da Quinta do Conde

Nome: _____

Data: _____



Professora Sofia Almeida
Ano letivo 2014/2015

- Observa a imagem.



1. Pinta tantas contas como...



AGRUPAMENTO DE ESCOLAS DA QUINTA DO CONDE
Escola Básica Integrada da Quinta do Conde

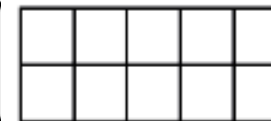

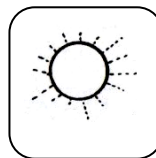



Nome: _____

Data: _____

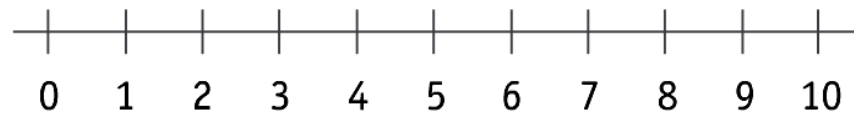


Professora Sofia Almeida
Ano letivo 2014/2015

2. Completa as molduras de acordo com o número de:



3. Assinala o número de crianças.



4. Observa o conjunto e completa com (€) e (∉) .





