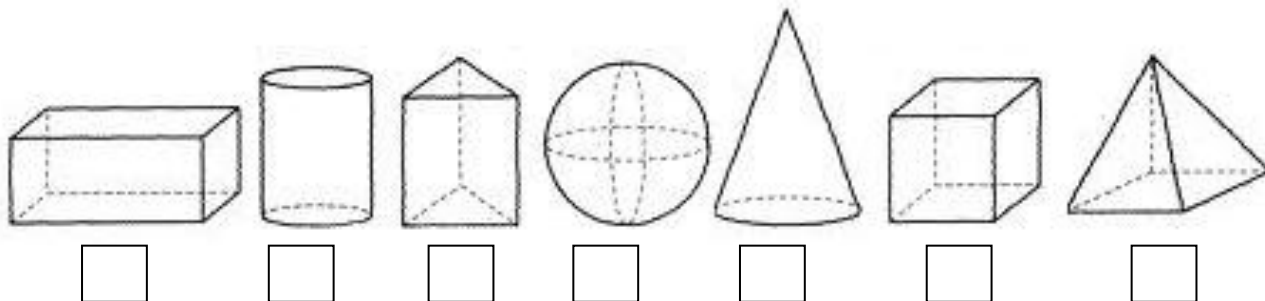


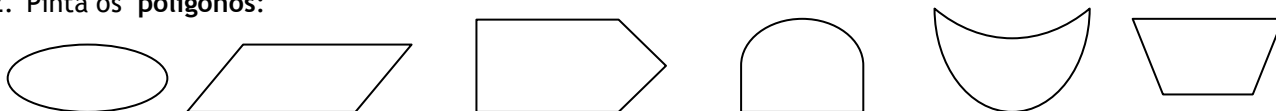


Nome: _____ Data: _____

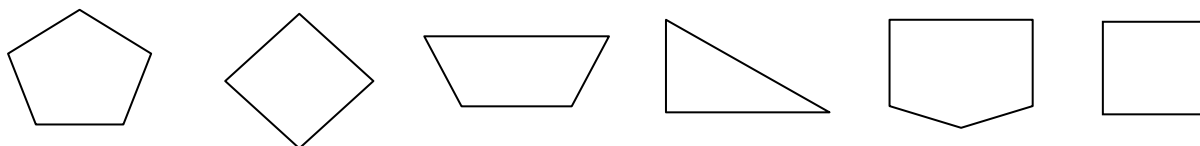
1. Pinta os ☐ :
- de amarelo, os sólidos que são **poliedros**;
 - de verde, os sólidos que são **não poliedros**;



2. Pinta os **polígonos**:



3. Pinta os **quadriláteros**:



4. Escreve os números por ordem crescente.

7 4 18 2 13 20 14 10

_____ < _____ < _____ < _____ < _____ < _____ < _____

5. Completa os quadros.

| Antes | Entre | Depois |
|-------|-------|--------|
| | 6 | |
| | 11 | |
| | 19 | |

| Antes | Entre | Depois |
|-------|-------|--------|
| 7 | | 9 |
| 14 | | 16 |
| 19 | | 21 |

6. Decompõe os números.

$$8 = 5 + 3$$

$$10 = \underline{\quad} + \underline{\quad}$$

$$7 = \underline{\quad} + \underline{\quad}$$

$$13 = \underline{\quad} + \underline{\quad}$$

$$20 = \underline{\quad} + \underline{\quad}$$

$$10 = \underline{\quad} + \underline{\quad} + \underline{\quad}$$

$$15 = \underline{\quad} + \underline{\quad} + \underline{\quad}$$

$$19 = \underline{\quad} + \underline{\quad} + \underline{\quad}$$

7. Calcula e completa.

