



Nome: \_\_\_\_\_ Data: \_\_\_\_\_

1. Decompõe os números.

$$8 = 5 + 3$$

$$14 = \underline{\quad} + \underline{\quad}$$

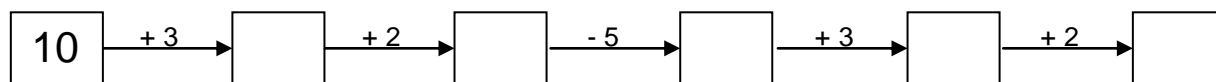
$$9 = \underline{\quad} + \underline{\quad}$$

$$18 = \underline{\quad} + \underline{\quad} + \underline{\quad}$$

$$10 = \underline{\quad} + \underline{\quad} + \underline{\quad}$$

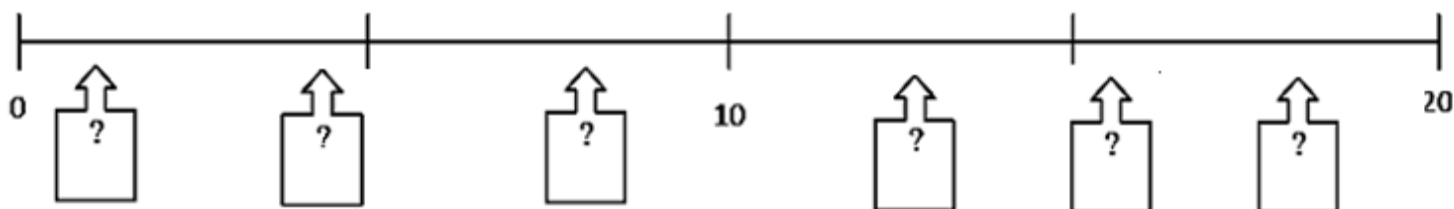
$$15 = \underline{\quad} + \underline{\quad} + \underline{\quad}$$

2. Calcula e completa.



3. Descobre os números que faltam e escreve-os no local correto:

13	7	18	16	4	1
----	---	----	----	---	---



4. Compara ( $>$   $=$   $<$ )

$$5 + 4 \dots\dots 9$$

$$6 - 3 \dots\dots 5$$

$$8 + 4 \dots\dots 10$$

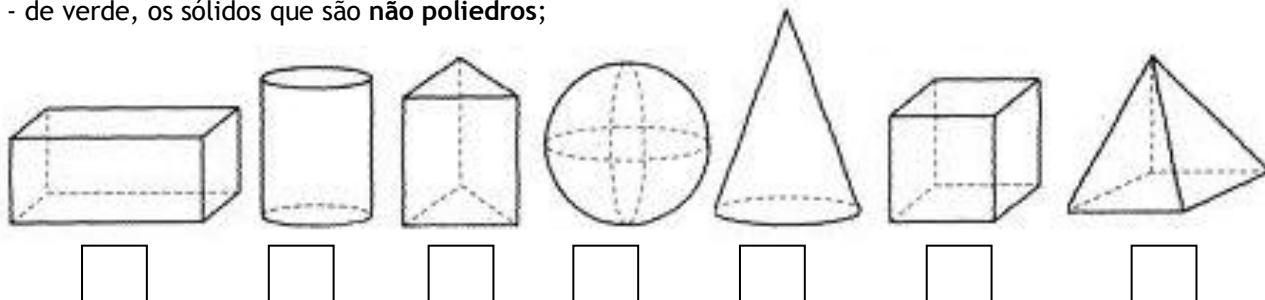
$$6 + 6 \dots\dots 19$$

$$10 - 5 \dots\dots 5$$

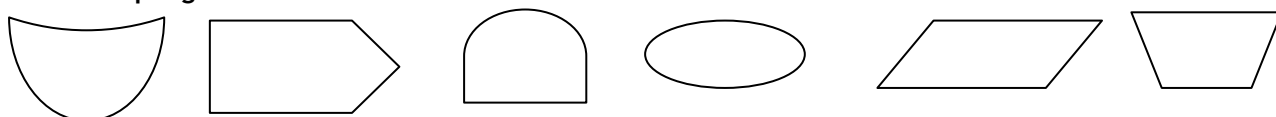
$$12 + 2 \dots\dots 12$$

5. Pinta os  $\square$  :

- de amarelo, os sólidos que são **poliedros**;
- de verde, os sólidos que são **não poliedros**;



6. Pinta os **polígonos**:



7. Pinta os **quadriláteros**:

