




Nome: _____


Data: _____



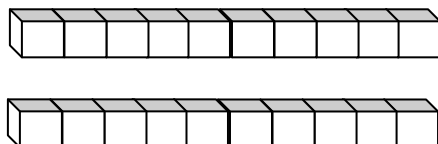
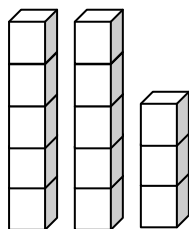
Professora Sofia Almeida
Ano letivo 2014 /2015

1. Preenche os quadros:

 +	2	3	5
5			
10			
15			
20			
25			

 -	3	4	5
25			
20			
15			
10			
5			

2. Observa os cubos de encaixe e completa.



$$\underline{\quad} + \underline{\quad} + \underline{\quad} = \underline{\quad}$$

$$20 - \underline{\quad} = 14$$




Nome: _____


Data: _____



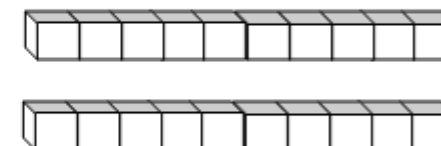
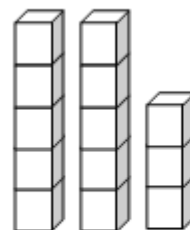
Professora Sofia Almeida
Ano letivo 2014 /2015

1. Preenche os quadros:

 +	2	3	5
5			
10			
15			
20			
25			

 -	3	4	5
25			
20			
15			
10			
5			

2. Observa os cubos de encaixe e completa.



$$\underline{\quad} + \underline{\quad} + \underline{\quad} = \underline{\quad}$$

$$20 - \underline{\quad} = 14$$